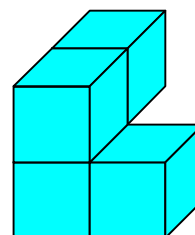
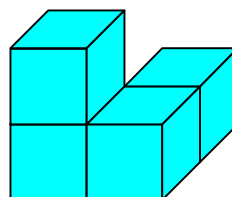
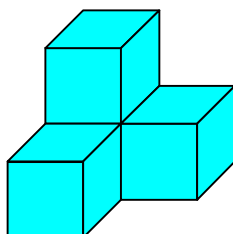
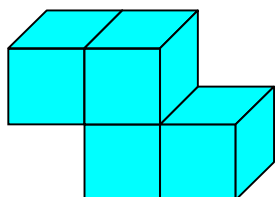
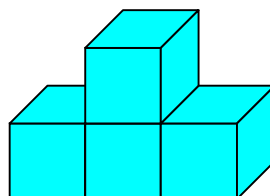
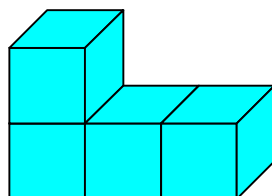
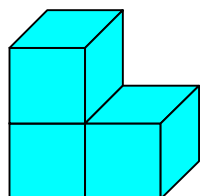


16 - I SETTE PEZZI DEL CUBO SOMA



Utilizzando alcuni pezzi, prova a costruire dei
parallelepipedi.

Riuscirai a utilizzare tutti i pezzi ?